


Wind Movement

Name _____ Date _____ Period _____

Use the diagrams below to draw and label illustrations of wind movement. Your drawing should include: Low Pressure (L), High Pressure (H), Cool, Warm, and arrows showing the direction of wind movement.





Describe the other factor that influences the earth's global wind systems.

Wind Movement

Name _____ Date _____ Period _____

Use the diagrams below to draw and label illustrations of wind movement. Your drawing should include: Low Pressure (L), High Pressure (H), Cool, Warm, and arrows showing the direction of wind movement.



Describe the other factor that influences the earth's global wind systems.